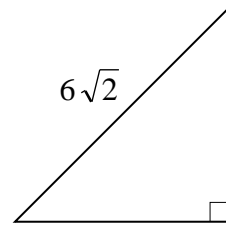
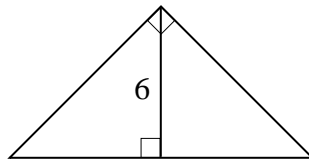
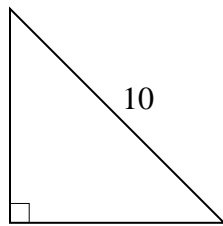
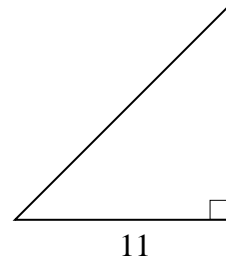
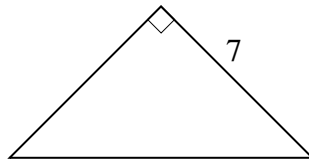
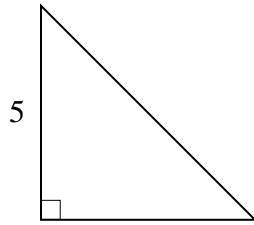


Geometry

SPECIAL TRIANGLES

Find the measures of the missing sides of the following special triangles.
These are 45-45-90 triangles.



These are 30-60-90 triangles

